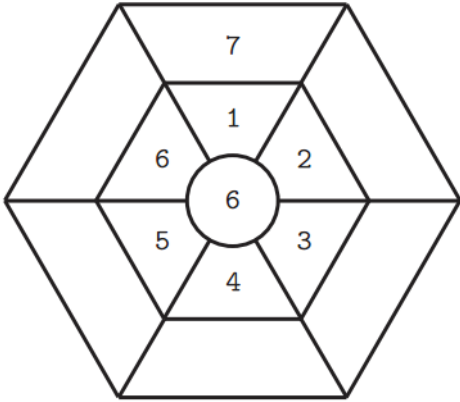


英文姓名: _____


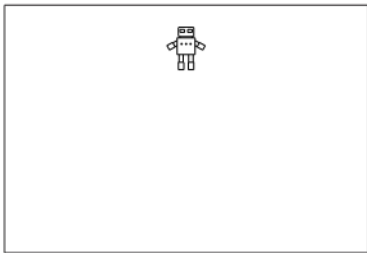
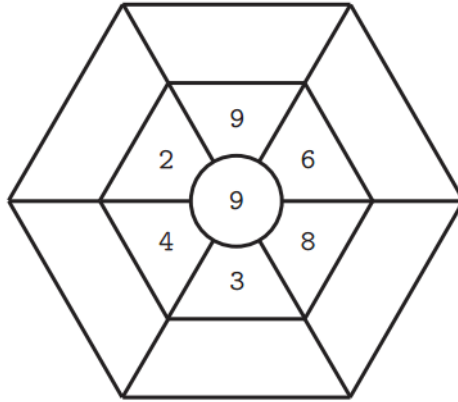
成績 : _____

(1) Read plus or minus sign first. (2) Do your addition or subtraction problems.

(+)



(-)



(a) $1 + 5 = (\quad)$

(c) $6 - 1 = (\quad)$

(b) $5 + 1 = (\quad)$

(d) $6 - 5 = (\quad)$

	8		3
-	1	+	1