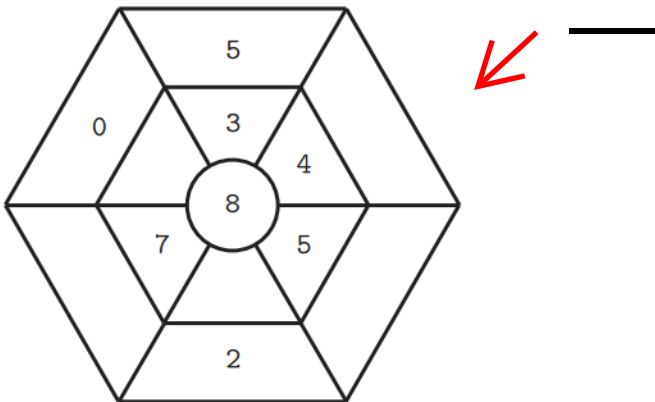
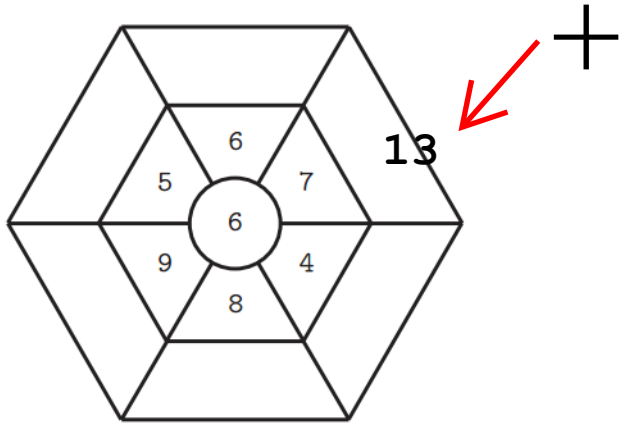


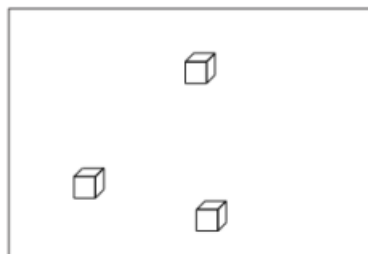
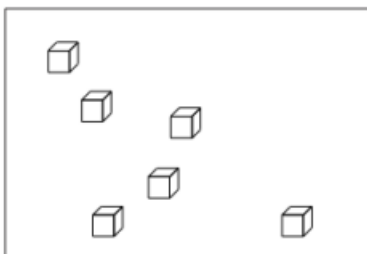
英文姓名: _____

成績: _____

(1) Read plus or minus sign first. (2) Do your addition or subtraction problems.



↓	5	4	↓	1	9
-	2	+	1	+	1
					-
					7



(a) $6 + 3 = (\quad)$

(c) $9 - 6 = (\quad)$

(b) $3 + 6 = (\quad)$

(d) $9 - 3 = (\quad)$