

中文姓名: _____

14-5

英文姓名: _____

成績: _____

$$\begin{array}{r} \square \\ + 21 \\ \hline \square 5 \end{array}$$

$$\begin{array}{r} 7 \\ + 2\square \\ \hline 28 \end{array}$$

$$\begin{array}{r} 46 \\ - \square \\ \hline \square 5 \end{array}$$

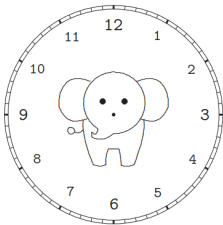
$$\begin{array}{r} 89 \\ - \square\square \\ \hline 66 \end{array}$$

$$\begin{array}{r} 44 \\ - \square \\ \hline \square 3 \end{array}$$

| | | | | | | | |
|---|--|---|---|--|--|---|--|
| $\begin{array}{r} 16 \\ - 14 \\ \hline \end{array}$ | $\begin{array}{r} 19 \\ + 9 \\ \hline \end{array}$ | $\begin{array}{r} 8 \\ + 3 \\ \hline \end{array}$ | $\begin{array}{r} 15 \\ + 12 \\ \hline \end{array}$ | $\begin{array}{r} 20 \\ - 3 \\ \hline \end{array}$ | $\begin{array}{r} 15 \\ + 9 \\ \hline \end{array}$ | $\begin{array}{r} 19 \\ - 18 \\ \hline \end{array}$ | $\begin{array}{r} 2 \\ + 13 \\ \hline \end{array}$ |
| | | | | | | | |

1. Please draw the clock hands:

1. 画时针跟分针:

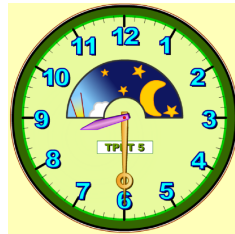


七点三十分。

07:30.

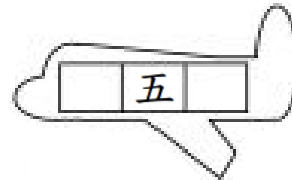
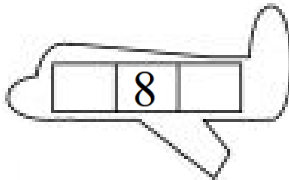
2. Please write down what time it is:

2. 这是几点?



Please write down before and after numbers:

For calendar question: before number is yesterday's date & after number is tomorrow's date.



1.Q: 今天是几月几号/日?

1.A: _____

1.Q: 今天星期几?

1.A: _____

2.Q: 明天是几月几号/日?

2.A: _____

2.Q: 明天星期几?

2.A: _____

3.Q: 昨天是几月几号/日?

3.A: _____

3.Q: 昨天星期几?

3.A: _____

Q: What is the date today?

A: _____

Q: What is the day of the week today?

A: _____

Q: What is the date tomorrow?

A: _____

Q: What is the day of the week tomorrow?

A: _____

Q: What was the date yesterday?

A: _____

Q: What was the day of the week yesterday?

A: _____



- 1. 今天是四月八日。
- 1. 今天是星期五。
- 2. 明天是四月九日。
- 2. 明天是星期六。
- 3. 昨天是四月七日。
- 3. 昨天是星期四。